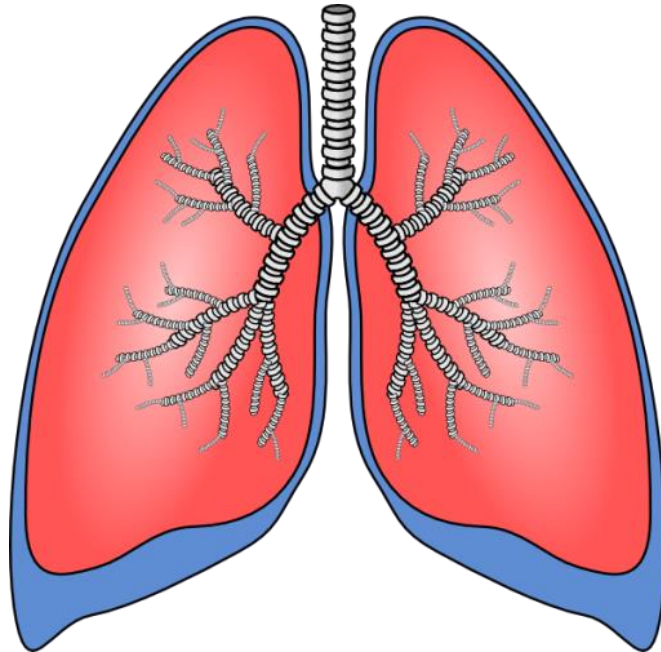


**NO
PREP**

**Plus
Video**

FREE QUIZ

Respiratory System




Promoting Success for You & Your Students!

You may also like the following printable resources to supplement your body systems teaching unit. Please click on each picture to view the resource in our store.

Grades 5-9

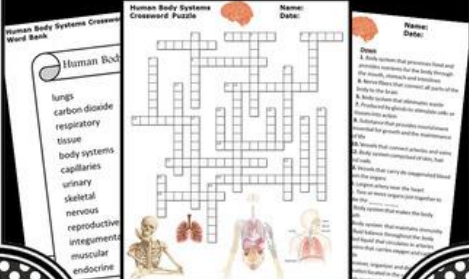
Which Body System Am I? Task Cards



Promoting Success!

Grades 5-8

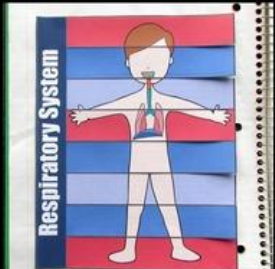
Body Systems Crossword Puzzle



Promoting Success!

Grades 5-8


Respiratory System Interactive Notebook



Promoting Success!

Grades 5-8


Body Systems Bundle Interactive Notebooks



Promoting Success!

Grade 5-8

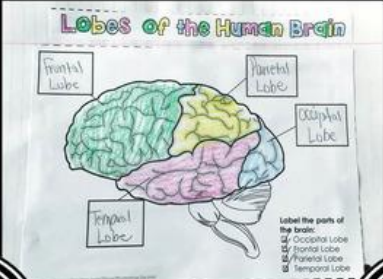
The Human Brain Crossword Puzzle



Promoting Success!

Grade 5-8

The Human Brain Interactive Notebook

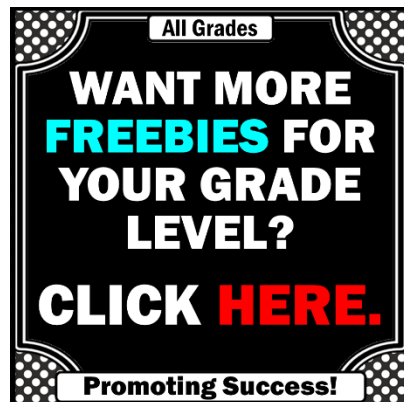


Promoting Success!

Why do I offer so many free activities?

Yes, I do have a lot...over 200 at the time of writing this...and that number grows monthly.

I do this for several reasons:



- I love helping teachers. As a former teacher, I understand your limited time. I also know the demands and expectations have increased since I was in the classroom.
- I want you to try before you buy. If it won't work for your students, then I don't want you to buy it. Free samples are the answer.
- I know you don't always need a full product. Sometimes, you just want a quick and easy activity or formative assessment. I don't mind. Download all the freebies you need. I'm here for you.

I could help you more if I knew what grade level you teach. Just enter your email, and I'll send you a form to let me know your grade level. I will also give you another freebie. It's simple, just click [HERE](#).

Thank you for all you do for kids! You are appreciated!
~Shelly Anton



©Paul and Shelly Anton: Promoting Success Printables, Inc.
All rights reserved. Purchase of this unit entitles the buyer the right to reproduce the pages in limited quantities for buyer's classroom use only. This INCLUDES any free or paid items downloaded from Promoting Success store. Duplication for a department, an entire school, an entire school system or commercial purposes is strictly PROHIBITED.

Copying ANY part of this product and placing it on the Internet in any form (even personal, classroom or school website, Amazon Inspire, etc.) is strictly FORBIDDEN and is a **VIOLATION** of the **Digital Millennium Copyright Act** (DMCA).

Clipart and elements found in this product are copyrighted and cannot be extracted and used outside of this file without permission or license.

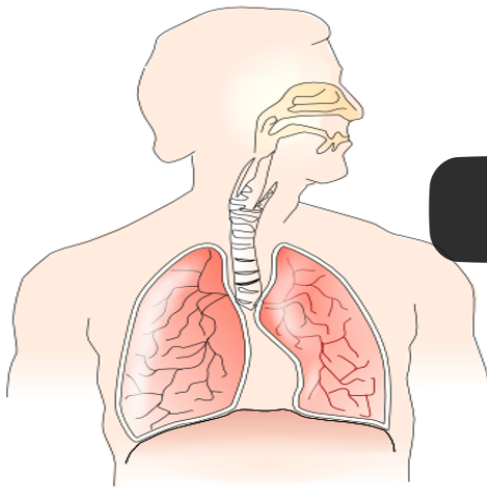
If you downloaded this resource from a store not operated by Promoting Success Printables, Inc., please be aware that the person who uploaded it has violated federal copyright law. Please report such violations. Thank you!

Shelly & Paul Anton
Promoting Success Printables, Inc.
teachingunits@gmail.com

This free worksheet and answer key may be used with this video found on our YouTube channel:

[Promoting Success for You and Your Students](#)
[YouTube Channel](#)

Respiratory System



**See what happens
when you breathe!**

Take a Quiz!

© Promoting Success Printables, Inc.

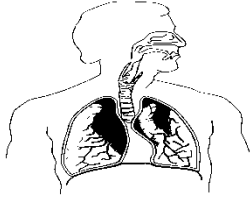
Click [HERE](#) to view video

Please subscribe to our YouTube channel
and give us a thumbs up!



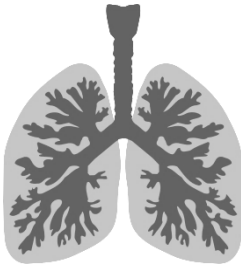
Respiratory System Video Quiz

Name:
Date:



1. What are the main organs of the respiratory system?

- A. nose
- B. alveoli
- C. lungs



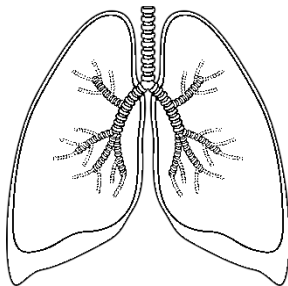
2. The trachea filters dust.

- A. true
- B. false



3. We exhale oxygen rich air from our lungs.

- A. true
- B. false



4. The two branches of the trachea that connect to each lung are _____.

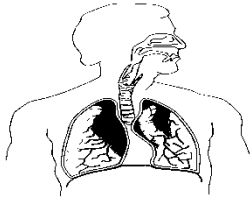
- A. alveoli
- B. bronchi
- C. lungs

5. The process of breathing is called _____.

- A. inhaling
- B. respiration
- C. oxygen

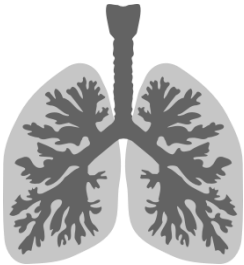
Respiratory System Video Quiz

Name: **KEY**
Date:



1. What are the main organs of the respiratory system?

- A. nose
- B. alveoli
- C. lungs**



2. The trachea filters dust.

- A. true
- B. false**

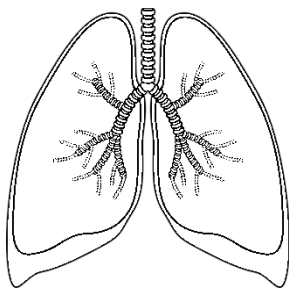
3. We exhale oxygen rich air from our lungs.

- A. true
- B. false**



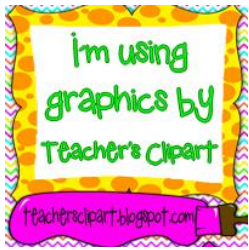
4. The two branches of the trachea that connect to each lung are _____?

- A. alveoli
- B. bronchi**
- C. lungs



5. The process of breathing is called _____?

- A. inhaling
- B. respiration**
- C. oxygen

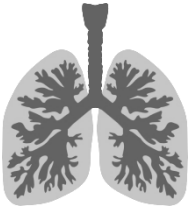


Please visit our blog for lots of teaching ideas and resources:

<http://www.promotingsuccessprintablesblog.com/>

For printable art for your classroom and home:

<http://www.etsy.com/shop/weloveprintableart>



Clkr.com



Click on each picture to view the product in our store.

All Grades

WANT MORE FREEBIES FOR YOUR GRADE LEVEL? CLICK HERE.

Promoting Success!

Grades 4-6

FREE Water Cycle Task Cards

Promoting Success!

Grades 4-8

FREE Scientific Method Task Cards

Promoting Success!

Grades 5-8

FREE Respiratory System Video & Quiz

Promoting Success!

Grades 5-8

FREE Muscular System Video & Quiz

Promoting Success!

Grades 4-6

FREE Rock Cycle Quiz

Promoting Success!

Grades 5-9

Which Body System Am I? Task Cards

Promoting Success!

Grades 5-8

Body Systems Bundle Interactive Notebooks

Promoting Success!

Grades 5-8

Body Systems Crossword Puzzle

Promoting Success!